

Nombre: _____


Fecha: _____

$$\begin{array}{r} 5 \\ + 4 \\ \hline \end{array}$$

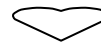
$$\begin{array}{r} 8 \\ - 1 \\ \hline \end{array}$$



$$\begin{array}{r} 0 \\ + 6 \\ \hline \end{array}$$

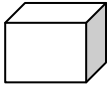


$$\begin{array}{r} 5 \\ - 2 \\ \hline \end{array}$$



$$\begin{array}{r} 1 \\ + 7 \\ \hline \end{array}$$

$$\begin{array}{r} 0 \\ - 0 \\ \hline \end{array}$$

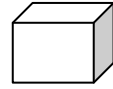


$$\begin{array}{r} 3 \\ + 2 \\ \hline \end{array}$$



$$\begin{array}{r} 2 \\ - 0 \\ \hline \end{array}$$

$$\begin{array}{r} 7 \\ + 2 \\ \hline \end{array}$$



$$\begin{array}{r} 1 \\ - 0 \\ \hline \end{array}$$

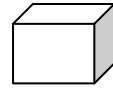
$$\begin{array}{r} 7 \\ + 0 \\ \hline \end{array}$$



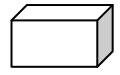
$$\begin{array}{r} 2 \\ - 2 \\ \hline \end{array}$$



$$\begin{array}{r} 7 \\ + 0 \\ \hline \end{array}$$

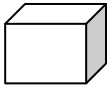


$$\begin{array}{r} 8 \\ - 3 \\ \hline \end{array}$$



$$\begin{array}{r} 7 \\ + 2 \\ \hline \end{array}$$

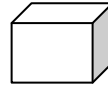
$$\begin{array}{r} 1 \\ - 1 \\ \hline \end{array}$$



$$\begin{array}{r} 4 \\ + 4 \\ \hline \end{array}$$



$$\begin{array}{r} 2 \\ - 2 \\ \hline \end{array}$$



$$\begin{array}{r} 4 \\ + 3 \\ \hline \end{array}$$



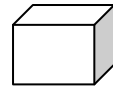
$$\begin{array}{r} 3 \\ - 2 \\ \hline \end{array}$$

$$\begin{array}{r} 9 \\ + 0 \\ \hline \end{array}$$



$$\begin{array}{r} 8 \\ - 4 \\ \hline \end{array}$$

$$\begin{array}{r} 5 \\ + 4 \\ \hline \end{array}$$

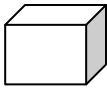


$$\begin{array}{r} 6 \\ - 1 \\ \hline \end{array}$$



$$\begin{array}{r} 5 \\ + 2 \\ \hline \end{array}$$

$$\begin{array}{r} 6 \\ - 1 \\ \hline \end{array}$$



$$\begin{array}{r} 0 \\ + 3 \\ \hline \end{array}$$



$$\begin{array}{r} 4 \\ - 0 \\ \hline \end{array}$$

$$\begin{array}{r} 8 \\ + 1 \\ \hline \end{array}$$



$$\begin{array}{r} 0 \\ - 0 \\ \hline \end{array}$$

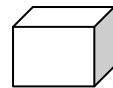
$$\begin{array}{r} 9 \\ + 0 \\ \hline \end{array}$$



$$\begin{array}{r} 7 \\ - 1 \\ \hline \end{array}$$



$$\begin{array}{r} 4 \\ + 1 \\ \hline \end{array}$$



$$\begin{array}{r} 5 \\ - 3 \\ \hline \end{array}$$

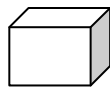


$$\begin{array}{r} 2 \\ + 6 \\ \hline \end{array}$$

$$\begin{array}{r} 0 \\ + 3 \\ \hline \end{array}$$



$$\begin{array}{r} 4 \\ - 3 \\ \hline \end{array}$$



$$\begin{array}{r} 7 \\ + 2 \\ \hline \end{array}$$

$$\begin{array}{r} 3 \\ - 2 \\ \hline \end{array}$$



$$\begin{array}{r} 6 \\ + 2 \\ \hline \end{array}$$